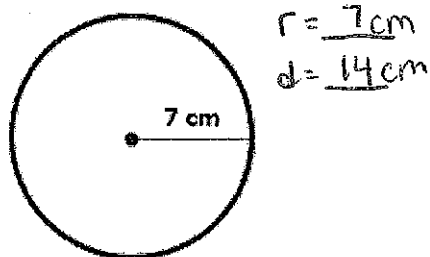


Pi Day: Area and Circumference

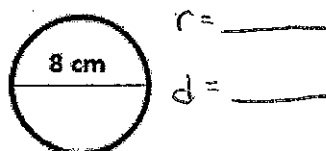
Name: _____

Solve the following problems (use 3.14 for π) and round your answers to the nearest tenth.
< Show all of your work > Then match each problem to its solution on the coloring page. Find the problem number in the picture and color it the color that is associated with that problem's solution.

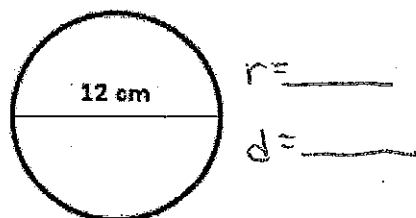
1. Find Circumference



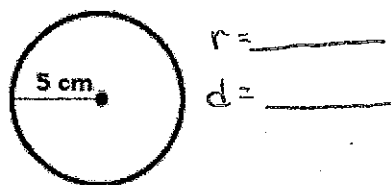
2. Find Area



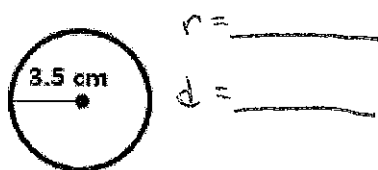
3. Find Area



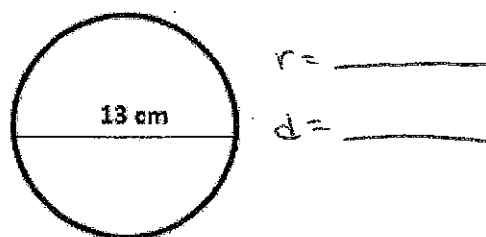
4. Find Circumference



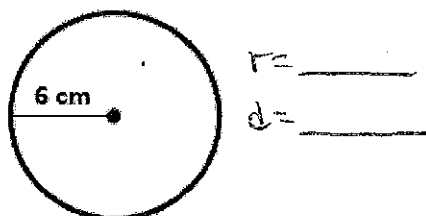
5. Find Area



6. Find Circumference



7. Find Circumference



8. Find Area

